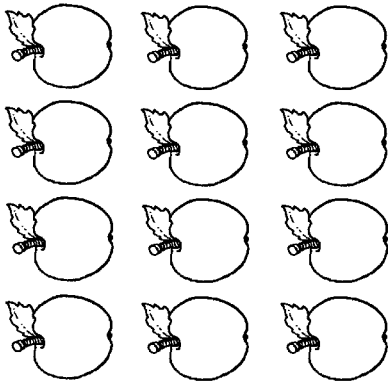


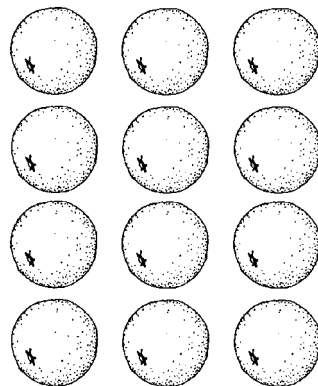
Name _____

Math Problem of the Day

1. Color 3 apples.



2. Color 7 oranges.



Draw a picture to solve the problem.

Write the number sentence on the line.

Syd planted one apple tree and three orange trees.

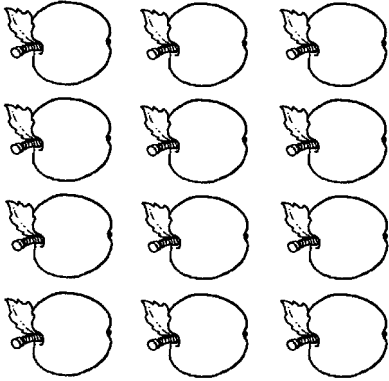
How many trees did Syd plant?



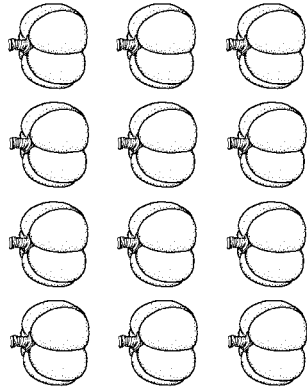
Name _____

Math Problem of the Day

1. Color 8 apples.



2. Color 5 pumpkins.




Draw a picture to solve the problem.

Write the number sentence on the line.

Dennis planted two apple seeds and seven pumpkin seeds.


How many seeds did Dennis plant in all?




Name _____

Math Problem of the Day

1. Color 9 acorns.



2. Color 4 acorns.




Draw a picture to solve the problem.

Write the number sentence on the line.

Lori picked up four acorns.

Then she picked up three more acorns.

How many acorns does Lori have?

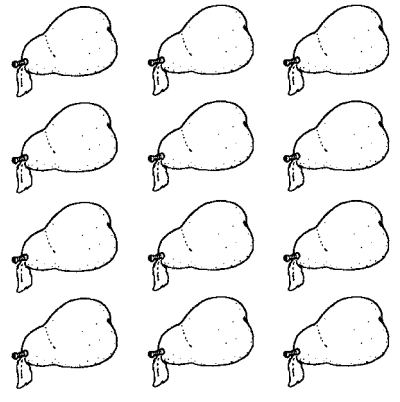


Name _____

Math Problem of the Day



1. Color 10 pears.



2. Color 2 pears.



Draw a picture to solve the problem.
Write the number sentence on the line.

Sam picked five pears for his mom.
He picked three pears for his dad.
How many pears did Sam pick?



Name _____


Math Problem of the Day

Draw a picture to solve the problem.
Write the number sentence on the line.


Ciera ate three large strawberries.
Then she ate six small strawberries.
How many strawberries did Ciera eat?



1. Color 6 strawberries.



2. Color 11 strawberries.



Answer Key

Math Problem of the Day 1

Students should draw 1 apple tree and 3 orange trees.

$$1 + 3 = 4$$

Quick Review

1. Students should color 3 apples.
2. Students should color 7 oranges.

Math Problem of the Day 2

Students should draw 2 apple seeds and 7 pumpkin seeds.

$$2 + 7 = 9$$

Quick Review

1. Students should color 8 apples.
2. Students should color 5 pumpkins.

Math Problem of the Day 3

Students should draw a set of 4 acorns and a set of 3 acorns.

$$4 + 3 = 7$$

Quick Review

1. Students should color 9 acorns.
2. Students should color 4 acorns.

Math Problem of the Day 4

Students should draw a set of 5 pears and a set of 3 pears.

$$5 + 3 = 8$$

Quick Review

1. Students should color 10 pears.
2. Students should color 2 pears.

Math Problem of the Day 5

Students should draw a set of 3 large strawberries and a set of 6 small strawberries.

$$3 + 6 = 9$$

Quick Review

1. Students should color 6 strawberries.
2. Students should color 11 strawberries.